

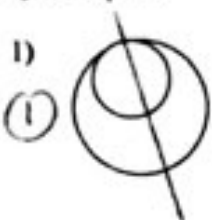
CSA

NOM : _____
Foyer _____

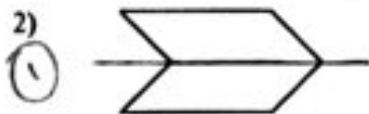
Panorama 4 : (Symétrique ou pas ?)

1. Trace tous les axes de symétrie de chacune de ces figures. Indique le nombre d'axes de symétrie pour chaque figure

Déf : Un axe de symétrie est une droite qui sépare une figure en deux parties congrues et symétriques.



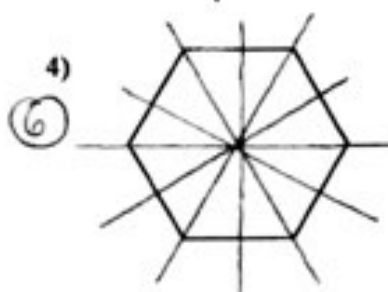
①



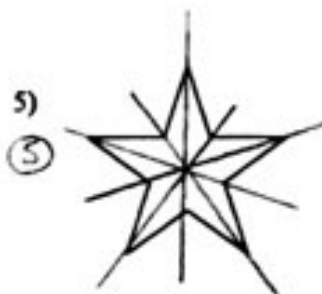
①



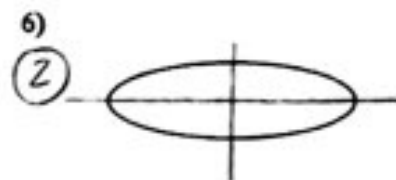
②



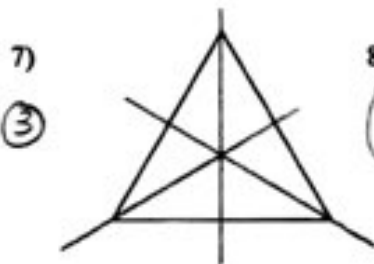
⑥



⑤



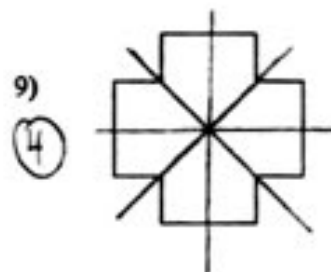
②



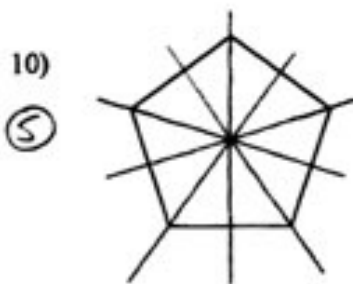
③



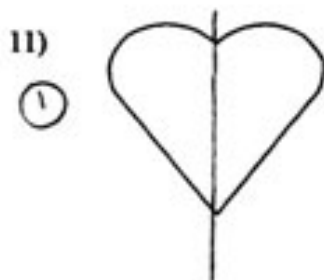
une infinie!



④



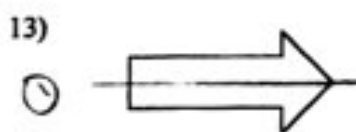
⑤




①



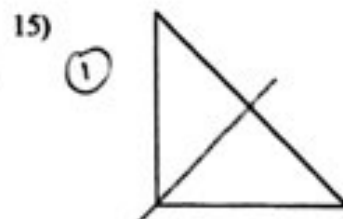
①



①



①



①